

Name: \_\_\_\_\_



# Playing dice – What time is it? (2)



Cut out the dice.




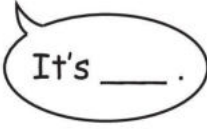
Fold it and glue it.



Now you can throw the dice!



Play with a partner.




Name: \_\_\_\_\_



# Rachel's day

1 a) First look at the pictures.



b) Now: Color the correct sentence parts in one color!


Rachel	watches TV	at quarter past five.
Rachel	walks the dog	at half past four.
Rachel	does her homework	at quarter to seven.
Rachel	goes to the supermarket	at half past nine.
Rachel	goes to school	at quarter past two.
Rachel	eats her lunch	at quarter to eight.
Rachel	has breakfast	at quarter past seven.
Rachel	feeds the cat	at quarter to ten.
Rachel	reads a book	at quarter to one.
Rachel	goes to bed	at half past seven.

Name: \_\_\_\_\_




# Clocks, clocks, clocks


**1**  Draw in the hands of time.




quarter to three




quarter to six




half past nine




quarter to one




half past ten




quarter to twelve




quarter to two




quarter past eleven




quarter to four



half past five



quarter past six



half past seven

**2**  First: Read the sentences.

The clock that shows quarter to five is yellow.

The clock that shows quarter past nine is blue.

The clock that shows quarter past ten is purple.





The clock that shows quarter past four is red.

The clock that shows half past three is white.

The clock that shows half past two is green.

The clock that shows quarter to ten is grey.

 Then color the clocks.



Name: \_\_\_\_\_



# At the zoo

1 a) First look at the opening hours of the zoo.



**ZOO**  
**Opening hours**

Monday, Tuesday ..... 11:30 a.m. – 7 p.m.  
 Wednesday ..... 10:45 a.m. – 6:15 p.m.  
 Thursday ..... 2:30 p.m. – 5:45 p.m.  
 Friday ..... 9 a.m. – 7 p.m.  
 Saturday, Sunday ..... 8 a.m. – 6:30 p.m.



b) Now write down the children's answers.

When does the zoo **open** on Mondays?

It opens at \_\_\_\_\_

When does the zoo **close** on Thursdays?

It closes at \_\_\_\_\_

Which day does the zoo **close** at seven o'clock?

It closes at seven o'clock on \_\_\_\_\_

When does the zoo **close** on Saturdays and Sundays?

It closes at \_\_\_\_\_



Name: \_\_\_\_\_



## A day at the zoo

1 a) Look at the sign.

### London Zoo

### Feeding times

tortoises (3:15 p.m.)	seals (5 p.m.)
tigers (4:30 p.m.)	elephants (5:15 p.m.)
monkeys (4:45 p.m.)	bears (5:45 p.m.)



b) First read the text.

Then fill in the missing times.

### A wonderful day at London Zoo

In London Zoo there are wild animals like , and .

Lisa and Harry decide to go to the zoo – to watch the wild animals.

The get their food at \_\_\_\_\_.

loves . So they go to the at \_\_\_\_\_.

That is the time when the monkeys eat their .

Then they walk to the and the . When and pass the at \_\_\_\_\_, they can see that the are eating .

The tortoises have already finished their and now they are resting.

But and can still see the . The eat at \_\_\_\_\_ . But isn't interested in elephants.

He says: "Let's go to the bears. It's \_\_\_\_\_, the are eating now." After that and go home. They are happy!